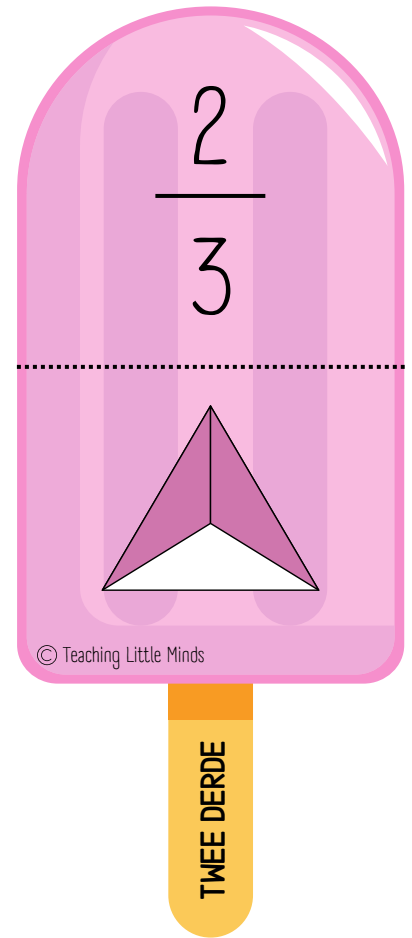
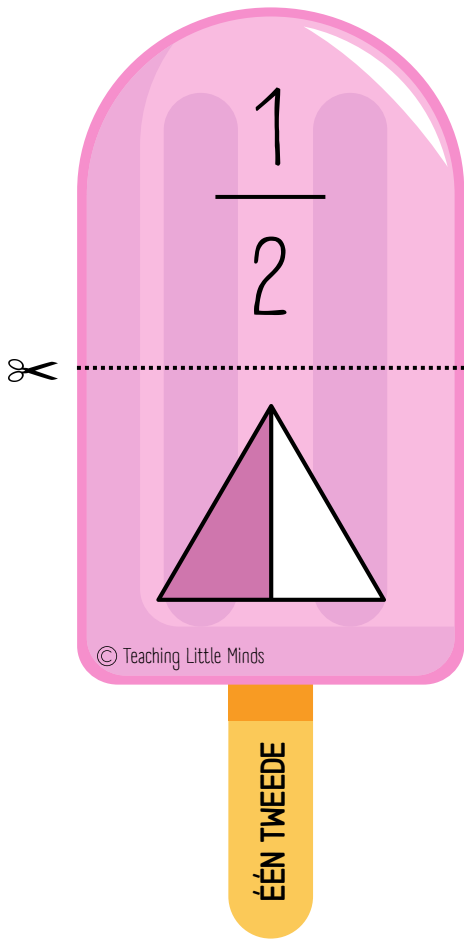




BREUKEN

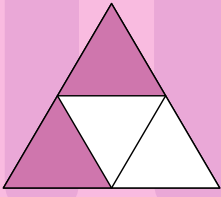
© Teaching Little Minds

# BREUKEN MET NOEMER 2 EN NOEMER 3



# BREUKEN MET NOEMER 4 EN NOEMER 5

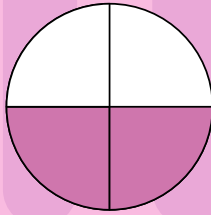
$$\frac{2}{4}$$



© Teaching Little Minds

TWEE VIERDE


$$\frac{2}{4}$$



© Teaching Little Minds

TWEE VIERDE


$$\frac{3}{4}$$



© Teaching Little Minds

DRIE VIERDE


$$\frac{3}{5}$$



© Teaching Little Minds

DRIE VIJFDE


$$\frac{4}{5}$$



© Teaching Little Minds

VIER VIJFDE

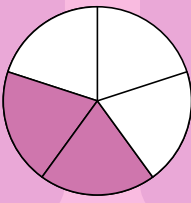
$$\frac{1}{5}$$



© Teaching Little Minds

ÉÉN VIJFDE


$\frac{2}{5}$



© Teaching Little Minds

**TWEE VIJFDE**


$\frac{5}{5}$



© Teaching Little Minds

**EEN GEHEEL**

$\frac{4}{5}$




© Teaching Little Minds

**VIER VIJFDE**

# BREUKEN MET NOEMER 6




$$\frac{3}{6}$$



© Teaching Little Minds

DRIE ZESDE

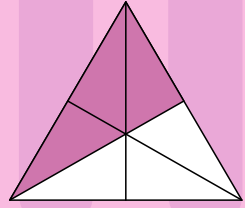
$$\frac{1}{6}$$



© Teaching Little Minds

ÉÉN ZESDE


$$\frac{3}{6}$$



© Teaching Little Minds

DRIE ZESDE


$$\frac{3}{6}$$



© Teaching Little Minds

DRIE ZESDE


$$\frac{4}{6}$$



© Teaching Little Minds

VIER ZESDE

$$\frac{6}{6}$$



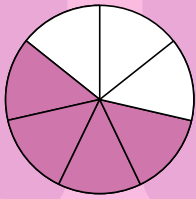
© Teaching Little Minds

ÉÉN GEHEEL

# BREUKEN MET NOEMER 7




$$\frac{4}{7}$$



© Teaching Little Minds

VIER ZEVENDE


$$\frac{3}{7}$$



© Teaching Little Minds

DRIE ZEVENDE

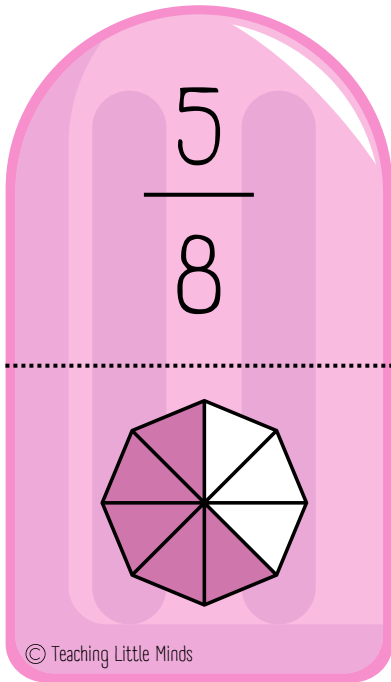
$$\frac{6}{7}$$



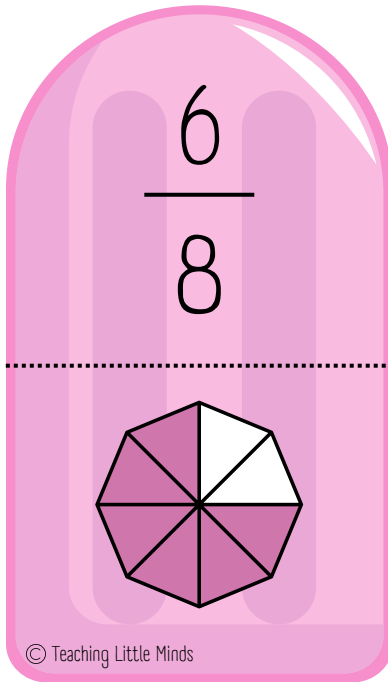
© Teaching Little Minds

ZES ZEVENDE

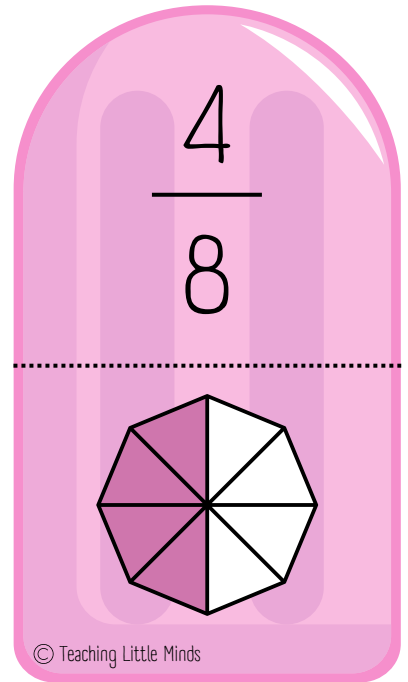
# BREUKEN MET NOEMER 8



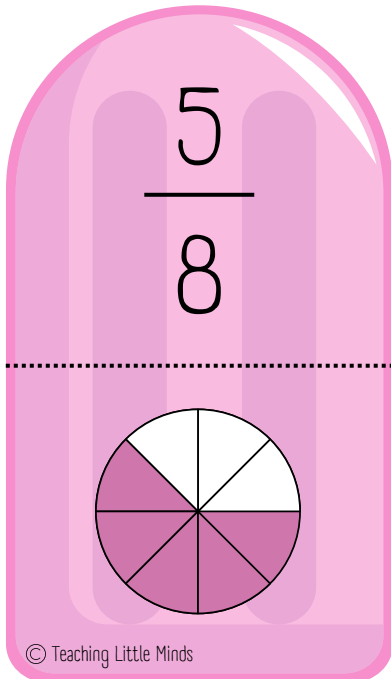
VIJF ACHTSTE



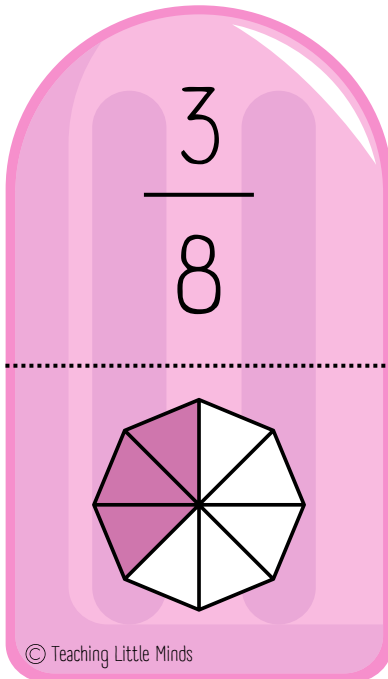
ZES ACHTSTE



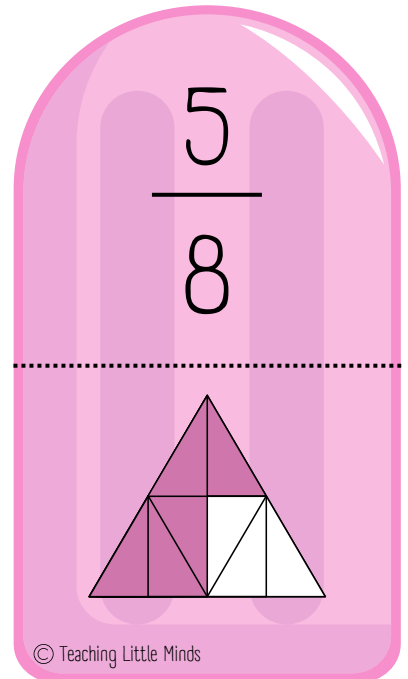
VIER ACHTSTE



VIJF ACHTSTE




DRIE ACHTSTE



VIJF ACHTSTE


2  
—  
8



© Teaching Little Minds

TWEE ACHTSTE


1  
—  
8



© Teaching Little Minds

ÉÉN ACHTSTE


1  
—  
8



© Teaching Little Minds

ÉÉN ACHTSTE

5  
—  
8



© Teaching Little Minds


VIJF ACHTSTE



# BREUKEN MET NOEMER 9




$$\frac{7}{9}$$



© Teaching Little Minds

ZEVEN NEGENDE

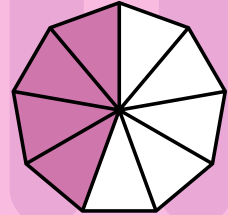
$$\frac{3}{9}$$



© Teaching Little Minds

DRIE NEGENDE


$$\frac{4}{9}$$



© Teaching Little Minds

VIER NEGENDE

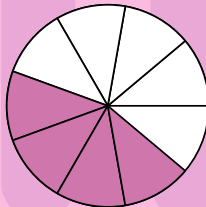
$$\frac{5}{9}$$



© Teaching Little Minds

VIJF NEGENDE

$$\frac{4}{9}$$




© Teaching Little Minds

VIER NEGENDE

# BREUKEN MET NOEMER 10




$$\frac{5}{10}$$



© Teaching Little Minds

VIJF TIENDE


$$\frac{4}{10}$$



© Teaching Little Minds

VIER TIENDE


$$\frac{6}{10}$$



© Teaching Little Minds

ZES TIENDE


$$\frac{3}{10}$$



© Teaching Little Minds

DRIE TIENDE

$$\frac{8}{10}$$



© Teaching Little Minds

ACHT TIENDE



## BREUKEN

**OPDRACHT: ZOEK DE  
BIJPASSENDE BREUK.**



## BREUKEN

**OPDRACHT: ORDEN DE KAARTJES  
VAN GROOT NAAR KLEIN.**



## BREUKEN

**OPDRACHT: WELKE BREUKEN ZIJN  
GELIJKWAARDIG? COMBINEER.**



## BREUKEN

**OPDRACHT: WELKE BREUKEN KAN JE  
VEREENVOUDIGEN? REKEN UIT.**



## BREUKEN

**OPDRACHT: ORDEN DE KAARTJES  
VAN KLEIN NAAR GROOT.**

